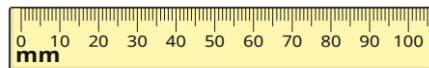


# Year 3 Homework - Spring Term 1 Week 1

Home Reading	Spellings	Online Tasks	Topic Task
<p>Please sign the reading record book each time you read your book.</p> <p>It can be a mix of their reading book and books from home and the school library.</p> <p><b>TASK</b></p> <p>What has been your favourite library book so far this year? What do you like about it?</p>	<p>Weekly spellings: Unit 6 'ation'</p> <p>Inform / information</p> <p>Alter / alteration</p> <p>Explain / explanation</p>	<p><b>Mathletics</b></p> <p>Your username and password are in your reading record.</p> <p>Homework is set <b>every month</b>, but you can have a go on live mathletics games whenever you like.</p> <p>Every week Mr Geldard checks to see who has been earning the most points.</p> <p>Have a look on the leader board when you are at school, it is on the stairs down to our classroom.</p>	<p><b>PE</b></p> <p>Last half term we were learning about physical exercise.</p> <p>Why are rests important?</p> <p>How is this part of a healthy lifestyle?</p> <p>Create a workout with different stations, rests and a description of why physical exercise helps us to have healthy bodies.</p>

## Maths questions

What is the length of each line in millimetres?



mm

a)

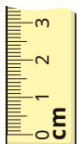


mm



mm

b)




mm




mm

c)



mm



mm

# Year 3 Homework - Spring Term 1 Week 2

Home Reading	Spellings	Online Tasks	Topic Task
<p>Please sign the reading record book each time you read your book.</p> <p>It can be a mix of their reading book and books from home and school library.</p> <p><b>TASK</b></p> <p>What has been your favourite book from one of our lessons so far this year?</p> <p>What do you like about it?</p>	<p>Weekly spellings: Unit 6 'ation'</p> <p>Explore / exploration</p> <p>Admire / admiration</p> <p>Observe / observation</p>	<p><b>Mathletics</b></p> <p>Your username and password are in your reading record.</p> <p>Homework is set <u>every month</u>, but you can have a go on live mathletics games whenever you like.</p> <p>Every week Mr Geldard checks to see who has been earning the most points.</p> <p>Have a look on the leader board when you are at school, it is on the stairs down to our classroom.</p>	<p><u>RE</u></p> <p>Christians see Jesus as a role model. This means they try to behave in a similar way to the way he behaved. This could be helping others.</p> <p>Draw a 4 part comic strip showing how you could help others.</p>

## Maths questions

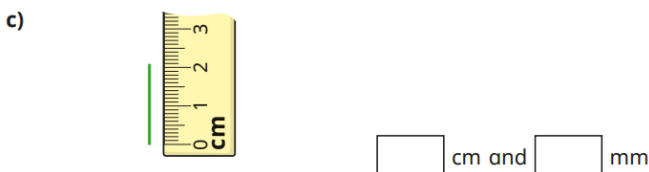
What is the length of each line?



cm and  mm

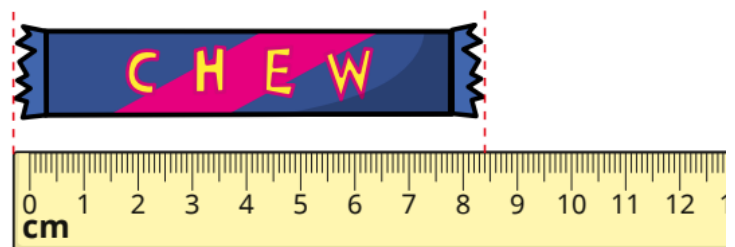


cm and  mm



cm and  mm

Tiny is measuring the length of a sweet chew.



The chew is 8 cm and 4 mm long.

What mistake has Tiny made?

# Year 3 Homework - Spring Term 1 Week 3

Home Reading	Spellings	Online Tasks	Topic Task
<p>Please sign the reading record book each time you read your book.</p> <p>It can be a mix of their reading book and books from home and school library.</p> <p><b>TASK</b></p> <p>What has been your least favourite book so far this year?</p> <p>What didn't you like about it?</p>	<p>Weekly spellings:</p> <p>Unit 7 'ch' c</p> <p>sound</p> <p>School</p> <p>Echo</p> <p>Chemist</p> <p>Scheme</p>	<div style="text-align: center; background-color: #00aaff; color: white; padding: 5px; border-radius: 10px; font-weight: bold; font-size: 1.2em;">Mathletics</div> <p>Your username and password are in your reading records.</p> <p>Homework is set <u>every</u> <u>month</u>, but you can have a go on live mathletics games whenever you like.</p> <p>Every week Mr Geldard checks to see who has been earning the most points.</p> <p>Have a look on the leader board when you are at school, it is on the stairs down to our classroom.</p>	<p><u>Geography</u></p> <p>In Geography, we are learning about the whole world.</p> <p>Can you find these countries on a map?</p> <p>Note in your book what continent they are a part of and what hemisphere they are in.</p> <ol style="list-style-type: none"> <li>1. Madagascar</li> <li>2. Argentina</li> <li>3. China</li> </ol>

## Maths questions

What unit would you use to measure each item?

Tick your answers.

a) the length of a crayon

metres

centimetres

millimetres

b) the length of a football pitch

metres

centimetres

millimetres

c) the length of a pencil sharpener

metres

centimetres

millimetres

d) the length of a book

metres

centimetres

millimetres

Write <, > or = to compare the lengths.

a) 1 m  1 cm

b) 1 mm  1 cm

c) 1 m  1 mm

# Year 3 Homework - Spring Term 1 Week 4

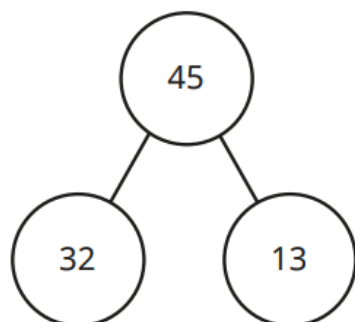
Home Reading	Spellings	Online Tasks	Topic Task
<p>Please sign the reading record book each time you read your book.</p> <p>It can be a mix of their reading book and books from home and school library.</p> <p><b>TASK</b></p> <p>Do you prefer stories with dragons? Stories with ___? Or do you prefer books with facts in? Describe what you like to read.</p>	<p>Weekly spellings: Unit 7 'ch' c sound</p> <p>Character Chaos Orchestra Stomach</p>	<div style="text-align: center; background-color: #00aaff; color: white; padding: 5px; border-radius: 10px; font-weight: bold; font-size: 1.2em;">Mathletics</div> <p>Your username and password are in your reading records.</p> <p>Homework is set <u>every</u> <u>month</u>, but you can have a go on live mathletics games whenever you like.</p> <p>Every week Mr Geldard checks to see who has been earning the most points.</p> <p>Have a look on the leader board when you are at school, it is on the stairs down to our classroom.</p>	<p><u>History</u></p> <p>Draw an artefact (an object) we have been learning about in our History lessons.</p> <p>Label and describe the object.</p> <p>(Maybe choose an axe if you are not sure what object to choose.)</p>

Maths questions

Complete the example below then create your own example with new numbers.

**Complete the fact family for each model.**

a)



$$\square + \square = \square$$

$$\square + \square = \square$$

$$\square - \square = \square$$

$$\square - \square = \square$$

# Year 3 Homework - Spring Term 1 Week 5

Home Reading	Spellings	Online Tasks	Topic Task
<p>Please sign the reading record book each time you read your book.</p> <p>It can be a mix of their reading book and books from home and school library.</p> <p><b>TASK</b></p> <p>Write a blurb for a story we have been reading in class recently. Remember, don't give away the exciting ending!</p>	<p>Weekly spellings: Unit 7 'ch' c sound</p> <p>Chorus Anchor Mechanic ache</p>	<div style="text-align: center; background-color: #00aaff; color: white; padding: 5px; border-radius: 10px; font-weight: bold; font-size: 1.2em;">Mathletics</div> <p>Your username and password are in your reading record.</p> <p>Homework is set <u>every</u> <u>month</u>, but you can have a go on live mathletics games whenever you like.</p> <p>Every week Mr Geldard checks to see who has been earning the most points.</p> <p>Have a look on the leader board when you are at school, it is on the stairs down to our classroom.</p>	<p><u>Art</u></p> <p>What are we learning about in art at the moment?</p> <p>Create a mind map (add sketches if you like) to detail what we are learning in our lessons.</p>

## Maths questions

Use the digit cards to make two 3-digit numbers.



Write an addition using your numbers.

\_\_\_\_\_

What is the answer to your addition?


Teddy has worked out an addition.

$175 + 135 = 300$

a) What subtraction could Teddy do to check he is correct?

\_\_\_\_\_

b) Draw the subtraction on the number line to show that Teddy is wrong.



c) What is the correct answer to Teddy's question?

# Year 3 Homework - Spring Term 1 Week 6

Home Reading	Spellings	Online Tasks	Topic Task
<p>Please sign the reading record book each time you read your book.</p> <p>It can be a mix of their reading book and books from home and school library.</p> <p><b>TASK</b></p> <p>Do you prefer stories with dragons? Stories with ___? Or do you prefer books with facts in? Describe what you like to read.</p>	<p>Weekly spellings: Unit 7 'ch' c sound</p> <p>Character Chaos Orchestra Stomach</p>	<div style="text-align: center; background-color: #00aaff; color: white; padding: 5px; border-radius: 10px; font-weight: bold; font-size: 1.2em;">Mathletics</div> <p>Your username and password are in your reading records.</p> <p>Homework is set <u>every month</u>, but you can have a go on live mathletics games whenever you like.</p> <p>Every week Mr Geldard checks to see who has been earning the most points.</p> <p>Have a look on the leader board when you are at school, it is on the stairs down to our classroom.</p>	<p><u>Cedars Values</u></p> <p>I'm sure you know already, but our Cedars Values are:</p> <ul style="list-style-type: none"> <li>Kindness</li> <li>Respect</li> <li>Honesty</li> <li>Pride</li> <li>Ambition</li> </ul> <p>Choose one.</p> <p>Then draw a poster, create a comic strip or write a story. You choose. How can you best show one of our Cedars Values?</p>

Maths questions

What multiplication tables are you learning in class?

1. Copy out the one you are learning at the moment.
2. Practise by yourself
3. Ask someone to test you.

**2 Times Table** Worksheets PLANET

$2 \times 1 = \square$	$2 \times 6 = \square$
$2 \times 2 = \square$	$2 \times 7 = \square$
$2 \times 3 = \square$	$2 \times 8 = \square$
$2 \times 4 = \square$	$2 \times 9 = \square$
$2 \times 5 = \square$	$2 \times 10 = \square$

© WorksheetsPlanet.com

**3 Times Table** Worksheets PLANET

$3 \times 1 = \square$	$3 \times 6 = \square$
$3 \times 2 = \square$	$3 \times 7 = \square$
$3 \times 3 = \square$	$3 \times 8 = \square$
$3 \times 4 = \square$	$3 \times 9 = \square$
$3 \times 5 = \square$	$3 \times 10 = \square$

© WorksheetsPlanet.com

**5 Times Table** Worksheets PLANET

$5 \times 1 = \square$	$5 \times 6 = \square$
$5 \times 2 = \square$	$5 \times 7 = \square$
$5 \times 3 = \square$	$5 \times 8 = \square$
$5 \times 4 = \square$	$5 \times 9 = \square$
$5 \times 5 = \square$	$5 \times 10 = \square$

© WorksheetsPlanet.com

**6 Times Table** Worksheets PLANET

$6 \times 1 = \square$	$6 \times 6 = \square$
$6 \times 2 = \square$	$6 \times 7 = \square$
$6 \times 3 = \square$	$6 \times 8 = \square$
$6 \times 4 = \square$	$6 \times 9 = \square$
$6 \times 5 = \square$	$6 \times 10 = \square$

© WorksheetsPlanet.com